




Activity 3

PLAY BALL, CHARLIE BROWN!

Charlie Brown and the Peanuts gang have just finished playing a baseball game. Can you tell how they did? Look at the chart and then answer the questions below.

Player	Balls	Strikes	Hits
 CHARLIE BROWN	5	9	0
 SNOOPY	4	5	2
 LUCY	7	6	1

How many hits did Charlie Brown, Lucy, and Snoopy have altogether? _____

How many more balls did Lucy have than Charlie Brown? _____

How many strikes did Snoopy and Charlie Brown have altogether? _____

How many more strikes than balls did Charlie Brown have? Write the number sentence:

CELEBRATE SPRING WITH THE PEANUTS GANG!