




# PLAY BALL, CHARLIE BROWN!

Charlie Brown and the **Peanuts** gang have just finished playing a baseball game. Can you tell how they did? Look at the chart and then answer the questions below.

Player	Balls	Strikes	Hits
 CHARLIE BROWN	5	9	0
 SNOOPY	4	5	2
 LUCY	7	6	1

How many hits did Charlie Brown, Lucy, and Snoopy have altogether? \_\_\_\_\_

How many more balls did Lucy have than Charlie Brown? \_\_\_\_\_

How many strikes did Snoopy and Charlie Brown have altogether? \_\_\_\_\_

How many more strikes than balls did Charlie Brown have? Write the number sentence:

\_\_\_\_\_

**CELEBRATE SPRING WITH THE PEANUTS GANG!**

Watch *It's the Easter Beagle, Charlie Brown!* on the ABC Network. Check your local listings for the time. And watch for the *Peanuts* movie coming this autumn!

